

CHOOSE THE
RIGHT ANSWER


A



B

Name: _____

**CHOOSE THE CORRECT OPTION.
A OR B?**



① How many balls are there?

A) There are two balls.

B) There are three balls.

A

B




② How many umbrellas are there?

A) There is one umbrella.

B) There are four umbrellas.

A

B



③ How many dolls are there?

A) There are two dolls.

B) There is one doll.

A

B

Name: _____

**CHOOSE THE CORRECT OPTION.
A OR B?**

1

How many pairs of scissors are there?

- A) There are two pairs of scissors.
- B) There are three pairs of scissors.

A

B



2

How many backpacks are there?

- A) There is one backpack.
- B) There are four backpacks.

A

B



3

How many notebooks are there?

- A) There is one notebook
- B) There are three notebooks.

A

B



CHOOSE THE
RIGHT ANSWER


A



B

Name: _____

**CHOOSE THE CORRECT OPTION.
A OR B?**



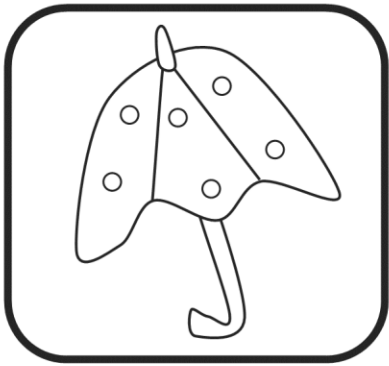
① How many balls are there?

A) There are two balls.

B) There are three balls.

A

B




② How many umbrellas are there?

A) There is one umbrella.

B) There are four umbrellas.

A

B



③ How many dolls are there?

A) There are two dolls.

B) There is one doll.

A

B

Name: _____

**CHOOSE THE CORRECT OPTION.
A OR B?**


1

How many pairs of scissors are there?

- A) There are two pairs of scissors.
- B) There are three pairs of scissors.

A

B



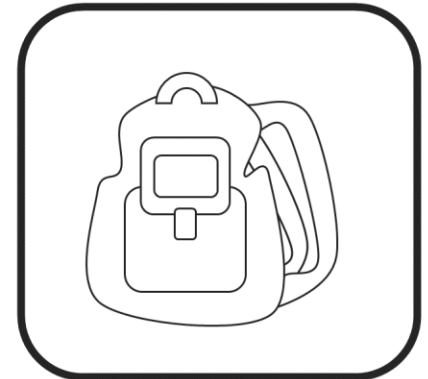
2

How many backpacks are there?

- A) There is one backpack.
- B) There are four backpacks.

A

B



3

How many notebooks are there?

- A) There is one notebook
- B) There are three notebooks..

A

B

